

# Task 1 Writing

Paragraph 1

Practice

Write the sentence and check your answer on the next slide.

# What the chart shows:

- Write a sentence to fully describe what the chart shows.
- Check your answer on the following slide.
- Make sure you include all the important information.

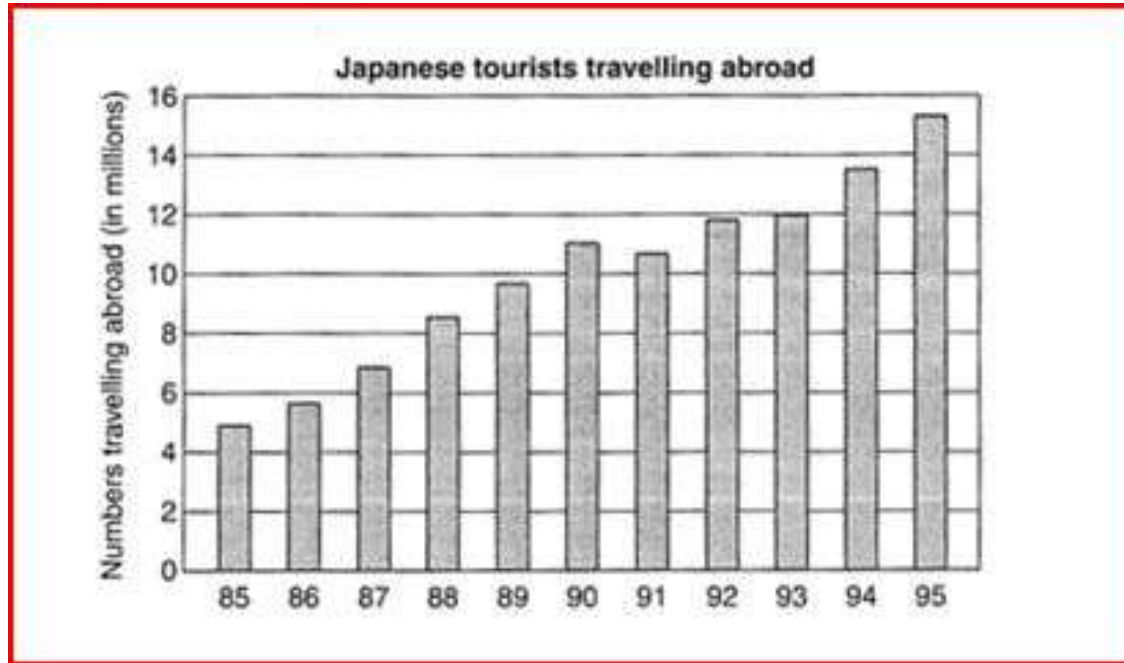
# What the chart shows:



# What the chart shows:

- The bar chart shows the number of people who got married and divorced between 1970 and 2000 in America.

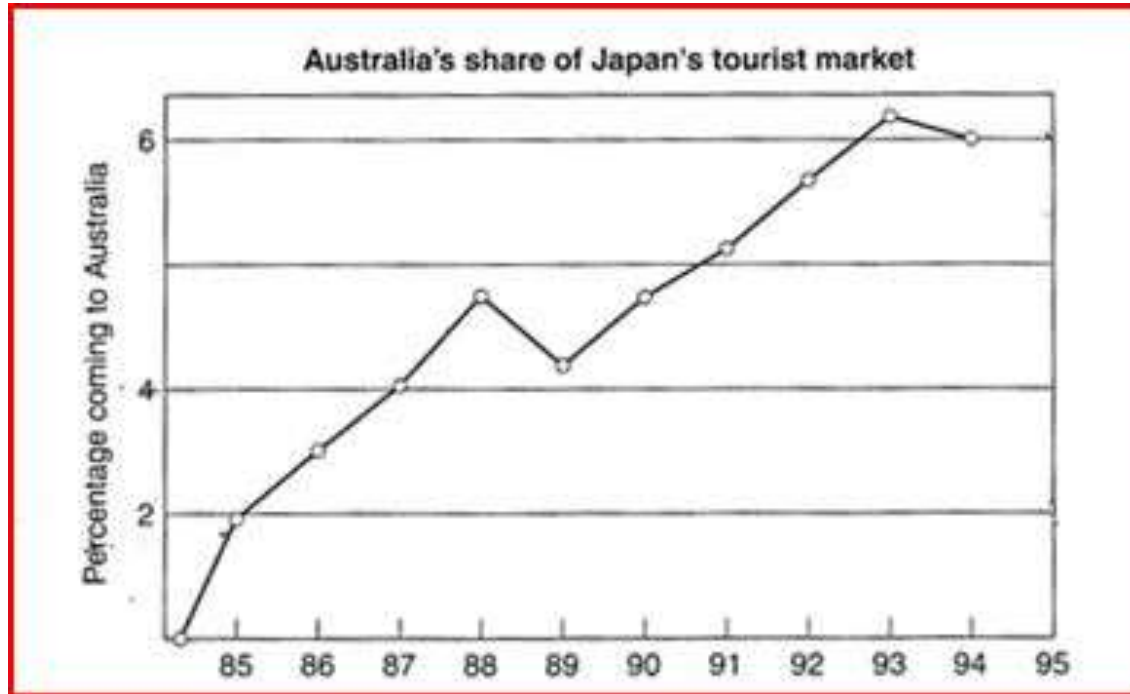
# What the chart shows:



# What the chart shows:

- The bar chart shows the number of Japanese tourists who travelled abroad between 1985 and 1995.

# What the chart shows:

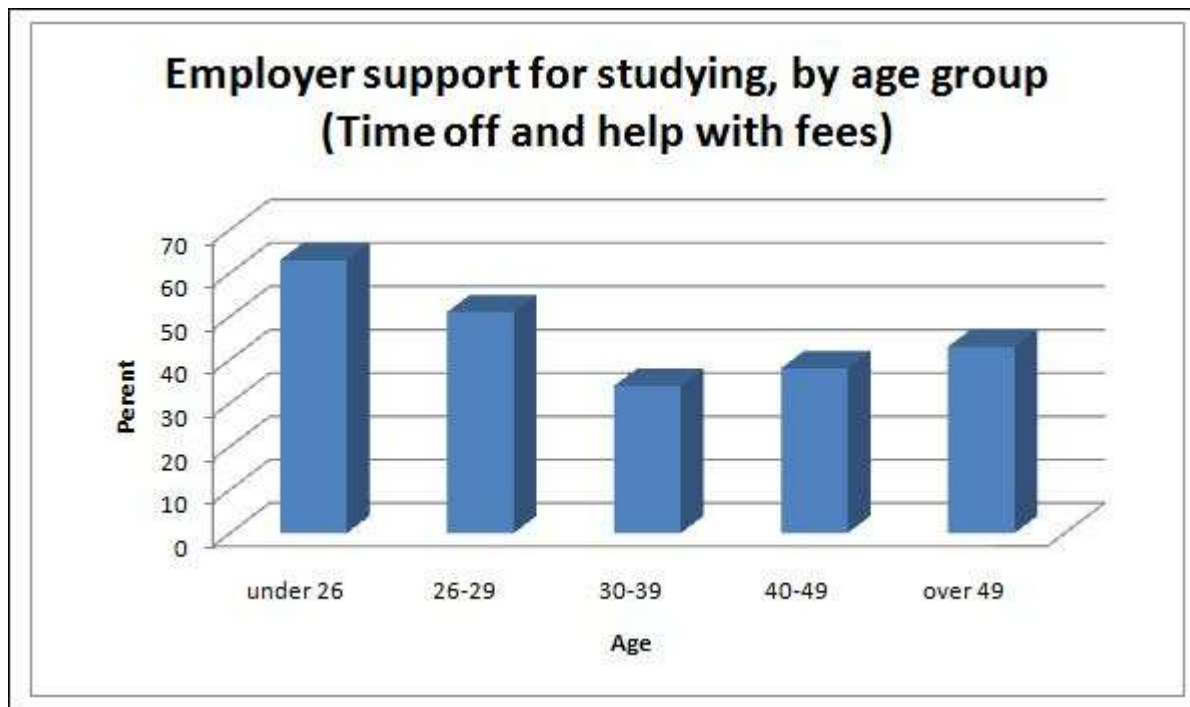


# What the chart shows:

- The line graph shows the percentage of Japanese tourists who went to Australia between 1985 and 1995.



# What the chart shows:



# What the chart shows:

- The bar chart shows the percentage of workers who are supported by their employers when they are studying, by age group.

# What the chart shows:

Water Consumption in Brazil and Congo in 2000			
Country	Population	Irrigated Land	Water Consumption per person
Brazil	176 million	26,500 km <sup>2</sup>	359 m <sup>3</sup>
Democratic Republic of Congo	5.2 million	100 km <sup>2</sup>	8 m <sup>3</sup>

# What the chart shows:

- The table shows the amount of water that was used by each person in Brazil and the Congo in 2000, together with the amount of irrigated land and number of people in the two countries.

# What the chart shows:

**Average distance in miles travelled per person per year, by mode of travel**

	<b>1985</b>	<b>2000</b>
<b>Walking</b>	255	237
<b>Bicycle</b>	51	41
<b>Car</b>	3,199	4,806
<b>Local bus</b>	429	274
<b>Long distance bus</b>	54	124
<b>Train</b>	289	366
<b>Taxi</b>	13	42
<b>Other</b>	450	585
<b>All modes</b>	<b>4,740</b>	<b>6,475</b>

# What the chart shows:

- The table shows the average number of miles which each person travelled by 8 different types of transport, together with the total distance travelled, in 1985 and 2000.